

(16.5)

Vector forms of Green's Theorem

REM Green's theorem

$$\left(\oint_C \vec{F} \cdot d\vec{r} \right) = \int_C P dx + Q dy = \iint_D \left(\frac{\partial Q}{\partial x} - \frac{\partial P}{\partial y} \right) dA,$$

where C is the boundary of the plane region D , and $\vec{F}(x,y) = P(x,y)\hat{i} + Q(x,y)\hat{j}$,
and $P(x,y), Q(x,y)$ have continuous partials in an open
region containing D .

REM $\text{Curl}(\vec{F}(x,y,z)) = \nabla \times \vec{F}$, and if $\vec{F}(x,y,z) = P(x,y)\hat{i} + Q(x,y)\hat{j} + 0\hat{k}$,

then

$$\text{Curl}(\vec{F}) = \begin{vmatrix} \hat{i} & \hat{j} & \hat{k} \\ \frac{\partial}{\partial x} & \frac{\partial}{\partial y} & \frac{\partial}{\partial z} \\ P(x,y) & Q(x,y) & 0 \end{vmatrix} = \left(\frac{\partial Q}{\partial x} - \frac{\partial P}{\partial y} \right) \hat{k}$$

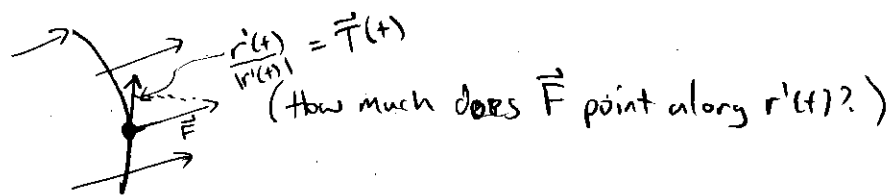
So Green's Theorem can be restated in vector form!

$$\boxed{\oint_C \vec{F} \cdot d\vec{r} = \iint_D \text{Curl}(\vec{F}) \cdot \hat{k} \, dA}$$

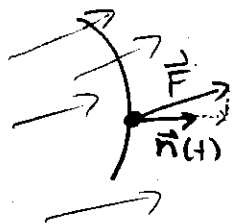
we have to dot with \hat{k} !

EXERCISE Why dot $\text{Curl}(\vec{F})$ with \hat{k} ? Hint: $\text{Curl}(\vec{F})$ is a vector,
and you need a function in the integral.

Next, remember that $\vec{F} \cdot d\vec{r}$ gives us the component of the vector field in the direction of the curve C :



We can ask if there is anything meaningful to glean from looking at the component of \vec{F} in the direction of the normal vector:



REM (from 126) If $\vec{r}(t) = \langle x(t), y(t) \rangle$, then

$$\text{the unit tangent vector is } \vec{T}(t) = \frac{\vec{r}'(t)}{|\vec{r}'(t)|} = \frac{x'(t)}{|\vec{r}'(t)|} \uparrow + \frac{y'(t)}{|\vec{r}'(t)|} \uparrow$$

EXERCISE Show that

$$\vec{n}(t) = \frac{y'(t)}{|\vec{r}'(t)|} \uparrow - \frac{x'(t)}{|\vec{r}'(t)|} \uparrow \text{ is normal to } \vec{T}(t).$$

Hint: Use dot product...

REM $\vec{F} \cdot d\vec{r}$ is "short-hand" for $\vec{F}(\vec{r}(t)) \cdot \vec{r}'(t) dt$, which we first derived from $\vec{F}(\vec{r}(t)) \cdot \vec{T}(t) ds$

$$\left(\vec{F} \cdot \vec{T} ds = \vec{F} \cdot \frac{\vec{r}'(t)}{|\vec{r}'(t)|} \cdot \sqrt{x'(t)^2 + y'(t)^2} dt = \vec{F} \cdot \frac{\vec{r}'(t)}{|\vec{r}'(t)|} \cdot |\vec{r}'(t)| dt \right)$$

this is $|\vec{r}'(t)|$!!

i.e., " $\vec{F} \cdot d\vec{r}$ " came from $\vec{F} \cdot \vec{T} ds$, the amount of \vec{F} in the direction of the unit tangent vector (i.e. the direction of the curve!)

So, we now want to consider

$$\underline{\int_C \vec{F}(t) \cdot \vec{n}(t) ds}$$

the amount of \vec{F} in the normal direction! Let's just compute it.

Let $\vec{F} = P(x,y)\hat{i} + Q(x,y)\hat{j}$, $\vec{r}(t) = \langle x(t), y(t) \rangle$

$$\int_C \vec{F} \cdot \vec{n} ds = \int_C \vec{F}(\vec{r}(t)) \cdot \left\langle \frac{y'(t)}{|r'(t)|}, \frac{-x'(t)}{|r'(t)|} \right\rangle \cdot \frac{\sqrt{(x'(t))^2 + (y'(t))^2} dt}{|r'(t)|}$$

$$= \int_C \langle P(x(t), y(t)), Q(x(t), y(t)) \rangle \cdot \left\langle \frac{y'(t)}{|r'(t)|}, \frac{-x'(t)}{|r'(t)|} \right\rangle |r'(t)| dt$$

$$= \int_C \left(\frac{P(x(t), y(t)) y'(t)}{|r'(t)|} + \frac{-Q(x(t), y(t)) x'(t)}{|r'(t)|} \right) |r'(t)| dt$$

$$= \int_C P(x(t), y(t)) \underbrace{y'(t) dt}_{dy} + \underbrace{-Q(x(t), y(t)) x'(t) dt}_{dx}$$

$$= \int_C P(x,y) dy - Q(x,y) dx$$

$$= \iint_D \left(\frac{\partial P}{\partial x} + \frac{\partial Q}{\partial y} \right) dA$$

$$= \iint_D \text{div}(\vec{F}) dA$$

Apply ^(the usual) Green's Theorem!
(Careful, P and Q are backwards, and you have a negative!)

!!!

So, we get

$$\oint_{\mathbf{E}} \vec{F} \cdot \vec{n} \, ds = \iint_D \operatorname{div}(\vec{F}) \, dA$$

which is actually a 2-dimensional version of the divergence theorem!

EXERCISES

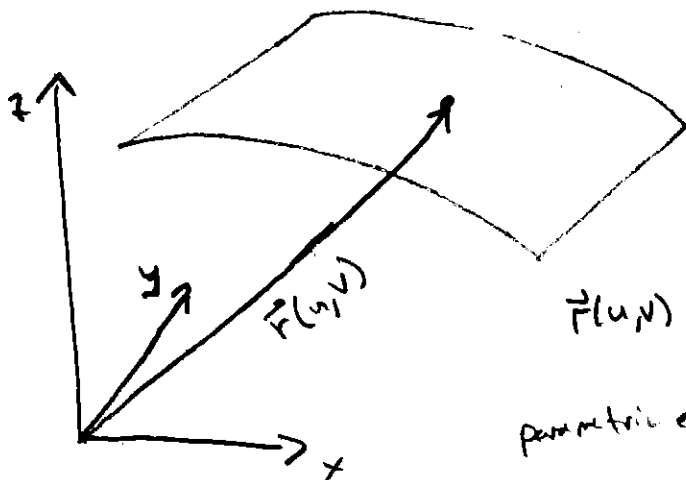
Do the following book problems (16.5)

5, # 9-11, # 12, # 25-26, ^{#29}, # 31, # 38 ~~39~~

For the bold: # 33-36, 39 (math + physics majors may appreciate these questions),

16.6 Parametric Surfaces and Their Areas

Idea: We would like to parametrize a surface, similar to how we parametrize lines or curves in 3-D space. With lines and curves, we only need one parameter, but with surfaces, we need two. To remember this, you can think lines and curves are "1-dimensional" and surfaces are "two-dimensional".



$$\vec{r}(u,v) = x(u,v)\hat{i} + y(u,v)\hat{j} + z(u,v)\hat{k}$$

$$\text{parametric equations: } \begin{cases} x(u,v) \\ y(u,v) \\ z(u,v) \end{cases}$$

EXAMPLE 1Parametrize the surface $z = 4x^2 + 2y^2$.

Let

$x = u$

$y = v$

$z = 4u^2 + 2v^2$

$\Rightarrow \vec{r}(u,v) = u\hat{i} + v\hat{j} + (4u^2 + 2v^2)\hat{k}$

EXAMPLE 2Parametrize the top half of the cone $z = 5\sqrt{x^2 + y^2}$

Same technique as example 1:

$x = u$

$y = v$

$z = 5\sqrt{u^2 + v^2}$

$\Rightarrow \vec{r}(u,v) = u\hat{i} + v\hat{j} + 5\sqrt{u^2 + v^2}\hat{k}$

Alternatively, notice we have an " $x^2 + y^2$ "

$x = r\cos\theta$

$y = r\sin\theta$

$z = 5r$

$z = 5\sqrt{(r\cos\theta)^2 + (r\sin\theta)^2}$

$= 5\sqrt{r^2}$

$= 5r$

$\Rightarrow \vec{r}(r,\theta) = r\cos\theta\hat{i} + r\sin\theta\hat{j} + 5r\hat{k}$

$(+) \left\{ \begin{array}{l} 0 \leq \theta < 2\pi \\ r \geq 0 \end{array} \right.$

EXAMPLE 3What surface is described by $\vec{r}(u,v) = \cos(u)\hat{i} + \sin(u)\hat{j} + v\hat{k}$?

$x(u,v) = \cos(u)$

$y(u,v) = \sin(u)$

$z(u,v) = v$

 \Rightarrow NOTICE!

$\textcircled{1} \quad x^2 + y^2 = 1 \quad \text{always!}$

$(\cos^2 u + \sin^2 u = 1)$

$\textcircled{2} \quad z = v, \quad \text{so we have no restrictions on } z.$

Thus, the surface being described is

$$x^2 + y^2 = 1, \text{ a cylinder!}$$

EXAMPLE 4 Parametrize $z^2 + y^2 = 4$, $0 \leq x \leq 1$, (A piece of a cylinder.)

Let $x(u, v) = v$

$$y(u, v) = 2 \cos u$$

$$z(u, v) = 2 \sin u$$

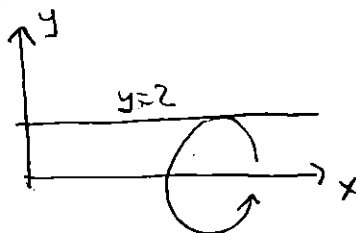
$$\Rightarrow \vec{r}(u, v) = v \hat{i} + 2 \cos u \hat{j} + 2 \sin u \hat{k}$$

for $\begin{cases} 0 \leq u \leq 2\pi \\ 0 \leq v \leq 1 \end{cases}$

REMARK Notice that the parametric equation can come with restrictions on u and v , such as in Example 4 where we only allow u to take on values between 0 and 2π , and v values between 0 and 1.

REMARK In the last couple examples, we could think of these cylinders as surfaces of revolution. For example, consider the cylinder

$y^2 + z^2 = 4$ from Ex 4. Start in the xy -plane with the function $y = z$:




Rotate it about the x -axis, and we get a "Surface of Revolution." Now, think of $y = z$ as " $f(x) = z$ ", and notice:

$$\begin{cases} x = x \\ y = f(x) \cdot \cos(x) \\ z = f(x) \cdot \sin(x) \end{cases}$$

parametrizes the "surface of revolution."

Surface of Revolution

For a function $f(x)$ rotated about the x -axis, we can parametrize as follows:



$$\begin{cases} x = x \\ y = f(x) \cos \theta \\ z = f(x) \sin \theta \end{cases}$$

giving us $\left[\vec{r}(x, \theta) = x \hat{i} + f(x) \cos \theta \hat{j} + f(x) \sin \theta \hat{k} \right]$
for $0 \leq \theta \leq 2\pi$


EXAMPLE 5

Find parametric equations for the surface generated by rotating the curve $y = \cos(x)$, $0 \leq x \leq 2\pi$, about the x -axis. What does the surface look like?

$$\Rightarrow f(x) = \cos(x)$$

$$\begin{cases} x = x \\ y = \cos(x) \cdot \cos \theta \\ z = \cos(x) \cdot \sin \theta \end{cases} \text{ for } \begin{cases} 0 \leq \theta \leq 2\pi \\ 0 \leq x \leq 2\pi \end{cases}$$

Looks like:



Back to general parametrizations!

EXAMPLE 6 Parametrize the sphere $x^2 + y^2 + z^2 = a^2$.

Use spherical coordinates! Notice, a is fixed.

$$x = a \sin \phi \cos \theta$$

$$y = a \sin \phi \sin \theta \quad 0 \leq \phi \leq \pi$$

$$z = a \cos \phi \quad , \quad 0 \leq \theta \leq 2\pi$$

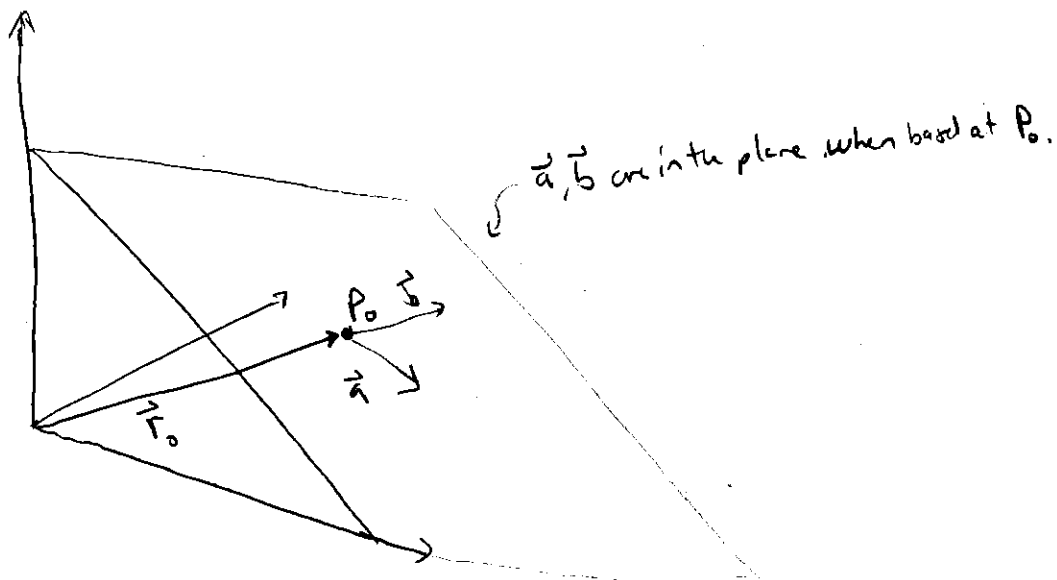
$$\Rightarrow \vec{r}(\phi, \theta) = a \sin \phi \cos \theta \hat{i} + a \sin \phi \sin \theta \hat{j} + a \cos \phi \hat{k}$$

$$\text{for } 0 \leq \phi \leq \pi$$

$$0 \leq \theta \leq 2\pi$$

EXAMPLE 7

Find a vector function $\vec{r}(u, v)$ that represents a plane that passes through point $P_0 = (x_0, y_0, z_0)$ with position vector \vec{r}_0 and that contains two non-parallel vectors \vec{a} and \vec{b} , $\vec{a} = \langle a_1, a_2, a_3 \rangle$ and $\vec{b} = \langle b_1, b_2, b_3 \rangle$.



Then, notice that if I start at $P_0 = (x_0, y_0, z_0)$, I can move along the " \vec{a} " direction or " \vec{b} " direction, or a little of both, to get anywhere on the plane! So

$$\vec{r}(u, v) = \vec{r}_0 + u\vec{a} + v\vec{b}$$

Where u is how much you move in the \vec{a} direction, and v is how much you move in the \vec{b} direction.

EXERCISE If $\vec{r}_0 = \langle x_0, y_0, z_0 \rangle$, $\vec{a} = \langle a_1, a_2, a_3 \rangle$, and $\vec{b} = \langle b_1, b_2, b_3 \rangle$, what is $\vec{r}(u, v)$ in the form $\langle x(u, v), y(u, v), z(u, v) \rangle$?

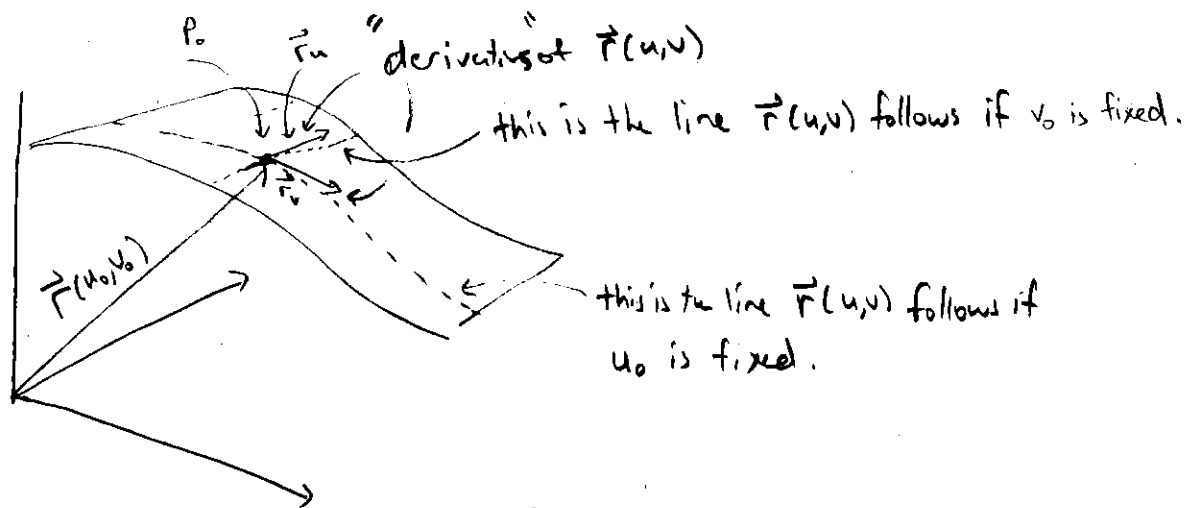
In other words, what are $x(u, v)$, $y(u, v)$ and $z(u, v)$?

Hint: $x(u, v) = x_0 + ua_1 + vb_1$.

Tangent Planes

Given any parametric surface $\vec{r}(u, v)$ and a point on that surface, can we write the equation of the tangent plane at that point?

Yes!



rem $\vec{r}'(t)$, on a curve, is a vector tangent to the curve!

So, it is reasonable to expect

$$\vec{r}_u = \frac{\partial x}{\partial u}(u_0, v_0) \hat{i} + \frac{\partial y}{\partial u}(u_0, v_0) \hat{j} + \frac{\partial z}{\partial u}(u_0, v_0) \hat{k}$$

$$\vec{r}_v = \frac{\partial x}{\partial v}(u_0, v_0) \hat{i} + \frac{\partial y}{\partial v}(u_0, v_0) \hat{j} + \frac{\partial z}{\partial v}(u_0, v_0) \hat{k}$$

to be tangent to the surface in two directions!

In other words, these two vectors live in the

tangent plane! (at the point (x_0, y_0, z_0) given by $\vec{r}(u_0, v_0)$.)

EXAMPLE 8

Find the tangent plane to the surface with parametric equations $x=u^2$, $y=v^2$, and $z=u+2v$ at the point $(1, 1, 3)$.

$$\vec{r}(u,v) = u^2 \hat{i} + v^2 \hat{j} + (u+2v) \hat{k}$$

$$\vec{r}_u = 2u \hat{i} + 0 \hat{j} + (1) \hat{k}$$

$$\vec{r}_v = 0 \hat{i} + 2v \hat{j} + 2 \hat{k}$$

These vectors will live in the tangent plane for any fixed u,v ,
so let's get a normal vector!

$$\vec{r}_u \times \vec{r}_v = \begin{vmatrix} \hat{i} & \hat{j} & \hat{k} \\ 2u & 0 & 1 \\ 0 & 2v & 2 \end{vmatrix} = -2v \hat{i} + 4u \hat{j} + 4uv \hat{k}$$

So, our normal vector is $-2v \hat{i} - 4u \hat{j} + 4uv \hat{k}$.

We need the point on the surface: given $(1,1,3) = (x_0, y_0, z_0)$.

What is the corresponding (u,v) ?

$$x = u^2 \Rightarrow u = \pm 1$$

$$y = v^2 \Rightarrow v = \pm 1$$

$$z = u+2v \Rightarrow u=1, v=1$$

So $\vec{r}(1,1)$ points to $(1,1,3)$.

\Rightarrow normal vector: $-2v \hat{i} - 4u \hat{j} + 4uv \hat{k} \xrightarrow{\substack{u=1 \\ v=1}} -2 \hat{i} - 4 \hat{j} + 4 \hat{k}$.

point: $(1,1,3)$

normal vector: $\langle -2, -4, 4 \rangle$

equation of plane (12b)

$$-2(x-1) + (-4)(y-1) + 4(z-3) = 0$$

$$\boxed{x + 2y - 2z = -3}$$